

Friday 27th March 2020

YR 2 LO: To measure capacity.


5a. The volume of the container below is a quarter full. True or false?





2 VF

6a. Use $<$, $>$ and $=$ symbols to compare the capacity of container A with container B.

A



B



2 VF

7a. Draw a line to the word that best describes the volume of each container.



full

quarter

half

three-
quarters



2 VF

8a. Order these items from the largest capacity to the smallest capacity.



A



B



C



D



2 VF

11a. Describe the volume of each container.



2 VF

6a. Jacinta knows that 12 glasses of water will fill 1 bucket or 2 jugs.



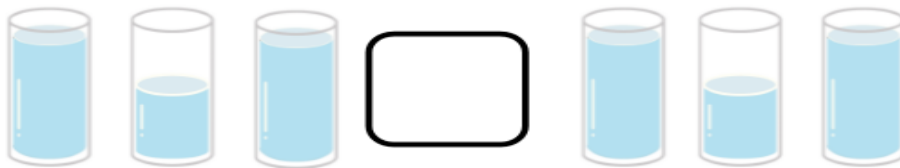

I think that the capacity of a bucket is greater than the capacity of a jug.

Is she right? Explain your answer.



2 R

8a. Complete these statements using $<$, $>$ and $=$ symbols.



2 PS

7a. Which container has the largest capacity?



How do you know?



2 R