




Can I identify and find horizontal and vertical lines? (Y3)

### Reasoning and problem solving

This page does not need to be printed. Write the short date and the above question in your maths book, underlining them neatly with a ruler.

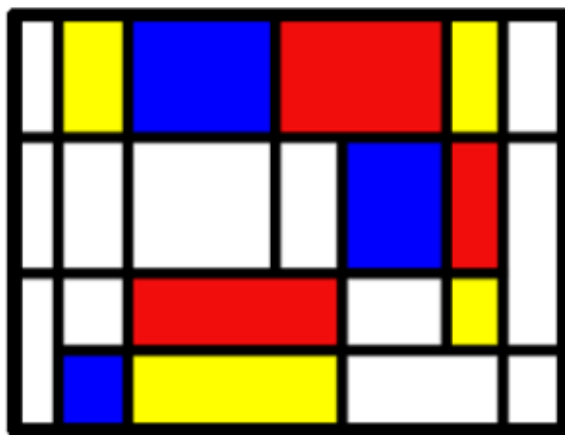
1)

Horizontal line of symmetry	Vertical line of symmetry	Horizontal and vertical lines of symmetry
		

Eva completes the table by drawing shapes.

Can you spot and correct her mistake?

2)






How many horizontal and vertical lines can you spot in this image by Mondrian?

Create your own piece of art work using only horizontal and vertical lines.

*Answers are on the next page.*

# Horizontal & Vertical

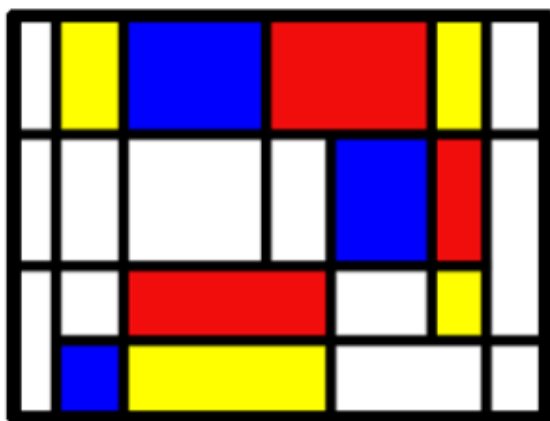
## Reasoning and Problem Solving

Horizontal line of symmetry	Vertical line of symmetry	Horizontal and vertical lines of symmetry
		

Eva completes the table by drawing shapes.

Can you spot and correct her mistake?

Eva thinks the star has both lines of symmetry, but it only has a vertical line of symmetry.



How many horizontal and vertical lines can you spot in this image by Mondrian?

Create your own piece of art work using only horizontal and vertical lines.

There are 5 horizontal lines and 8 vertical lines.